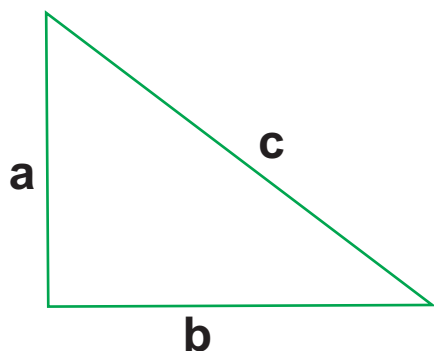


Opseg je zbroj duljina svih stranica trokuta. Izračunaj opseg prema zadanim duljinama stranica za svaki trokut.

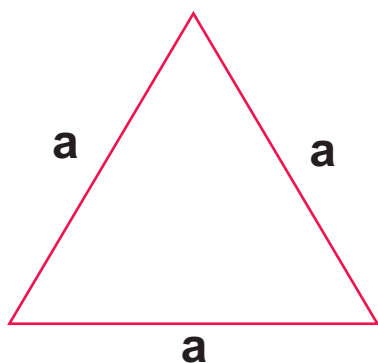


$$a = 2 \text{ cm}$$

$$b = 3 \text{ cm}$$

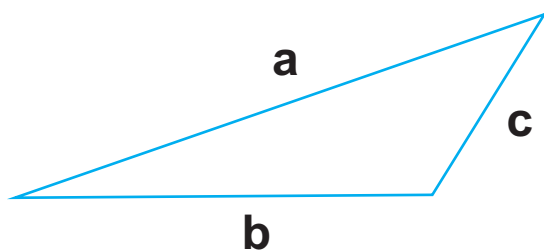
$$c = 5 \text{ cm}$$

$$O = \underline{\hspace{2cm}}$$



$$a = 4 \text{ cm}$$

$$O = \underline{\hspace{2cm}}$$

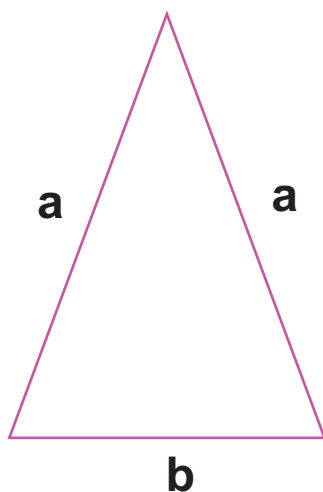


$$a = 60 \text{ mm}$$

$$b = 45 \text{ mm}$$

$$c = 30 \text{ mm}$$

$$O = \underline{\hspace{2cm}}$$



$$a = 50 \text{ mm}$$

$$b = 35 \text{ mm}$$

$$O = \underline{\hspace{2cm}}$$