



$$2 - 1 = \underline{\quad}$$




$$3 - 1 = \underline{\quad}$$




$$5 - 2 = \underline{\quad}$$



$$4 - 2 = \underline{\quad}$$



$$6 - 3 = \underline{\quad}$$



$$4 - 3 = \underline{\quad}$$