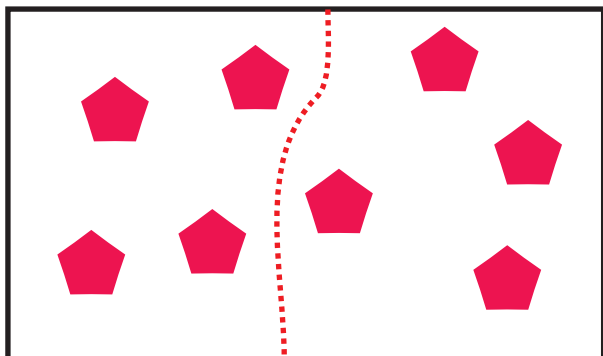
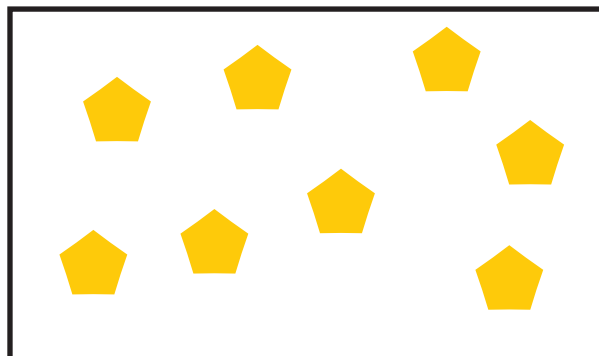


Podijeli svaku skupinu na dva jednaka dijela, pa napiši račun za svaki.




$$\boxed{8} = \boxed{4} + \boxed{}$$



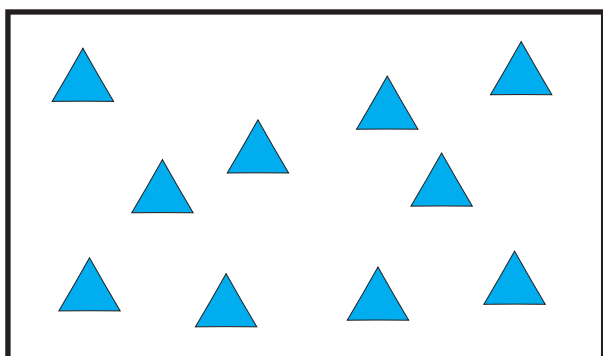
$$\boxed{} = \boxed{} + \boxed{}$$



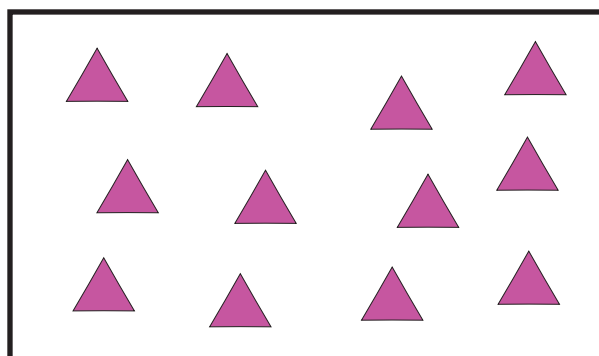
$$\boxed{} = \boxed{} + \boxed{}$$



$$\boxed{} = \boxed{} + \boxed{}$$



$$\boxed{} = \boxed{} + \boxed{}$$



$$\boxed{12} = \boxed{} + \boxed{}$$