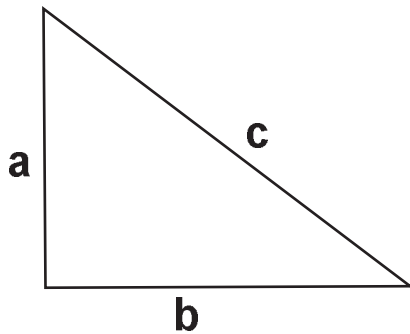


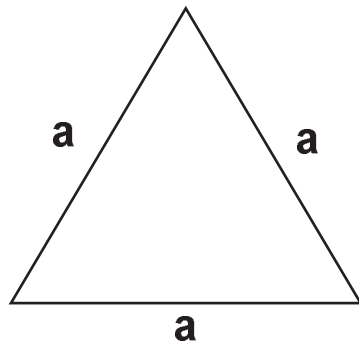
Opseg je zbroj duljina svih stranica trokuta. Izračunaj opseg prema zadanim duljinama stranica za svaki trokut.

Upiši u kružić pored trokuta "1" za jednakostranični, "2" za pravokutni, "3" za jednakokračni i "4" za raznostranični trokut.



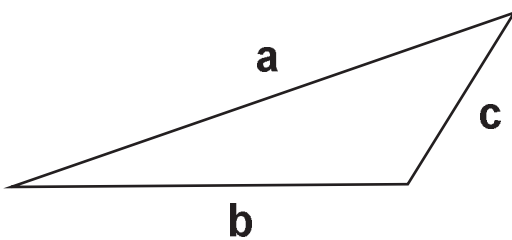
$a = 2 \text{ cm}$   
 $b = 3 \text{ cm}$   
 $c = 5 \text{ cm}$

O = \_\_\_\_\_



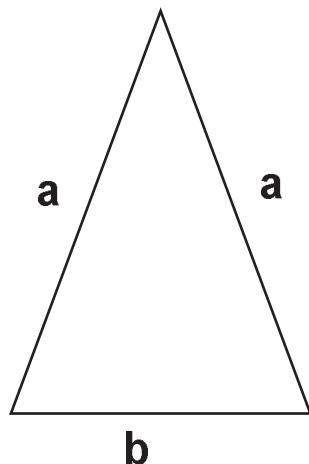
$a = 4 \text{ cm}$

O = \_\_\_\_\_



$a = 60 \text{ mm}$   
 $b = 45 \text{ mm}$   
 $c = 30 \text{ mm}$

O = \_\_\_\_\_



$a = 50 \text{ mm}$   
 $b = 35 \text{ mm}$

O = \_\_\_\_\_