

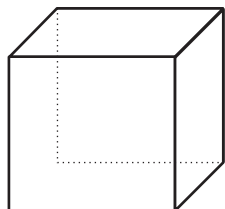
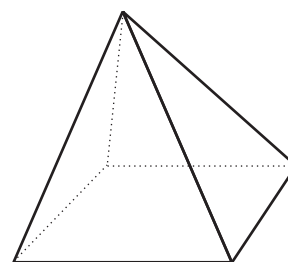
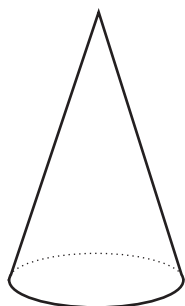


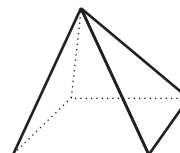

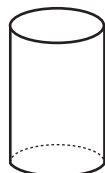
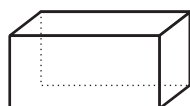
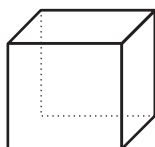


Ispod svakog geometrijskog tijela dopiši naziv.
(kugla, kocka, kvadar, piramida, valjak, stožac)





Prebroji koliko ploha ima svako geometrijsko tijelo pa upiši broj ispod.



ploha

ploha

ploha

ploha

ploha

ploha