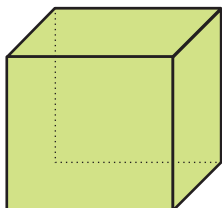




Koliko stranica, koliko kuteva, koliko bridova?



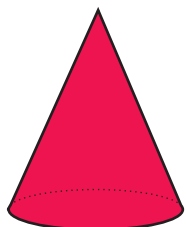
Kocka ima ___ ploha, ___ kutova i ___ bridova.



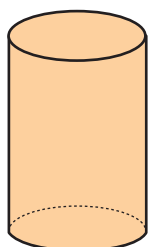
Kvadar ima ima ___ ploha, ___ kutova i ___ bridova.



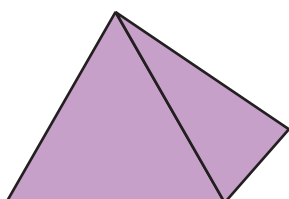
Kugla ima ___ plohu, ___ kutova i ___ bridova.



Stožac ima ___ plohe, ___ kut i ___ brid.



Valjak ima ___ plohe, ___ kutova i ___ brida.



Piramida ima ___ ploha, ___ kutova i ___ bridova.