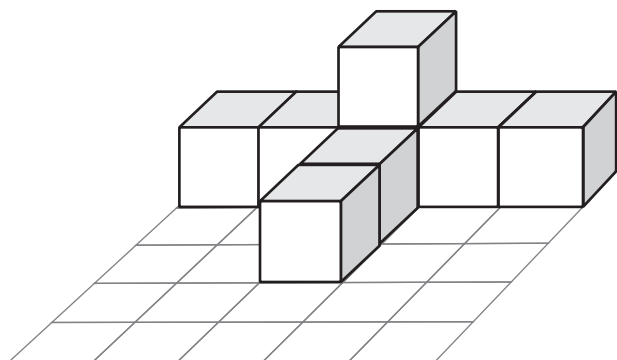
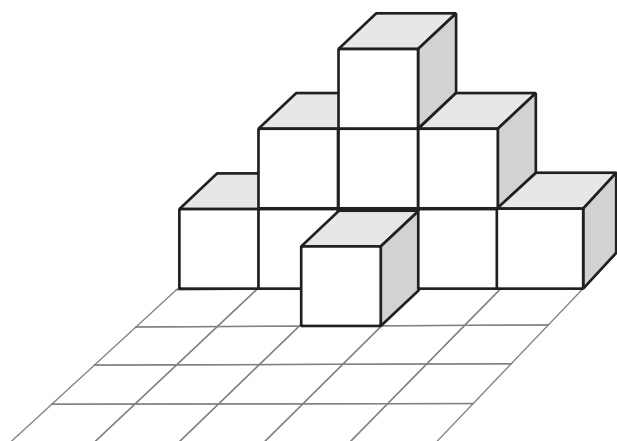


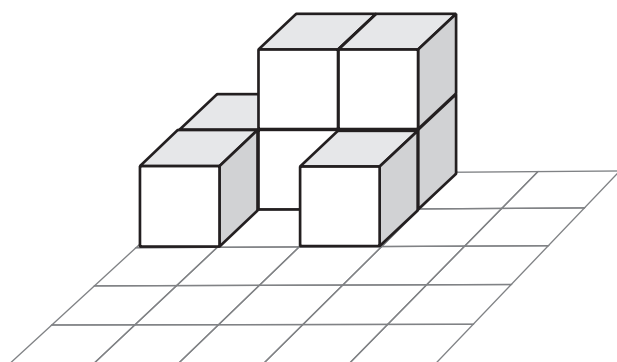
Prema slici na lijevoj strani upiši u mrežu koliko se kocaka, gledano odozgo, nalazi na kojem mjestu u mreži.



1	1	.....	.....	.....
		.....		
		.....		



.....	.....	.....	.....	.....
		.....		



.....	.....	.....		
.....		.....		