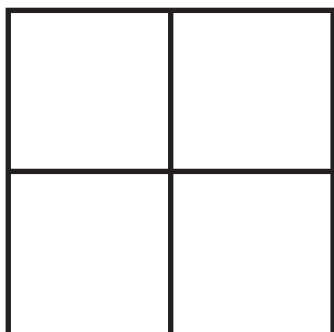
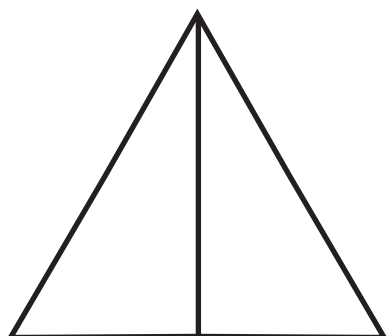
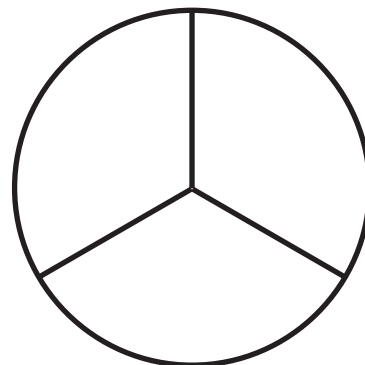


Oboji na svakoj slici onaj dio koji je zadan razlomkom.



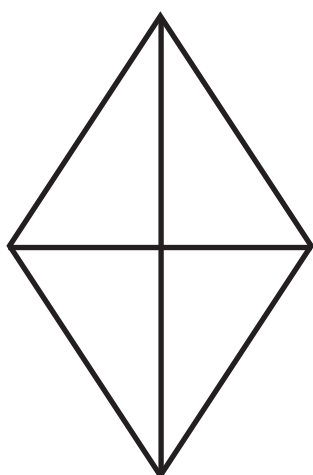
$$\frac{1}{4}$$

$$\frac{1}{3}$$



$$\frac{1}{2}$$

$$\frac{2}{3}$$



$$\frac{3}{4}$$

$$\frac{1}{2}$$

