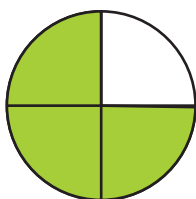


Koliki dio likova je obojen?

Zaokruži u svakom redu razlomak koji pripada liku s lijeve strane.

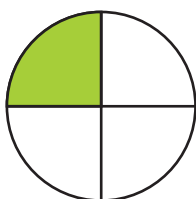


$$\frac{1}{4}$$

$$\frac{2}{4}$$

$$\frac{1}{2}$$

$$\frac{3}{4}$$



$$\frac{1}{4}$$

$$\frac{1}{3}$$

$$\frac{1}{2}$$

$$\frac{3}{4}$$

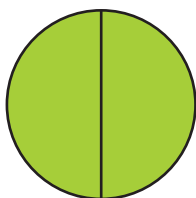


$$\frac{1}{4}$$

$$\frac{1}{3}$$

$$\frac{1}{2}$$

$$\frac{2}{3}$$



$$\frac{2}{4}$$

$$\frac{3}{3}$$

$$\frac{2}{2}$$

$$\frac{3}{4}$$



$$\frac{1}{4}$$

$$\frac{1}{2}$$

$$\frac{1}{3}$$

$$\frac{2}{3}$$



$$\frac{2}{4}$$

$$\frac{1}{3}$$

$$\frac{1}{2}$$

$$\frac{2}{3}$$