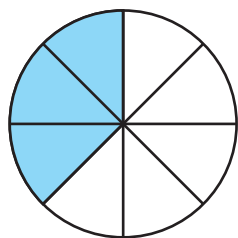
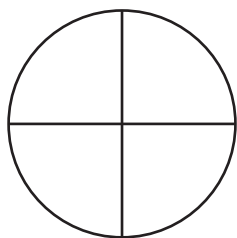


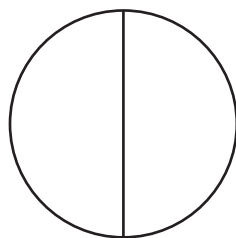
Oboji dio kruga prema zadanom razlomku.



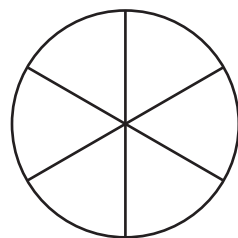
$$\frac{3}{8}$$



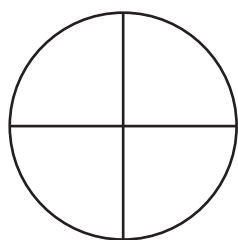
$$\frac{1}{4}$$



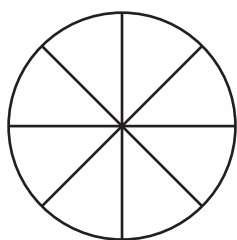
$$\frac{1}{2}$$



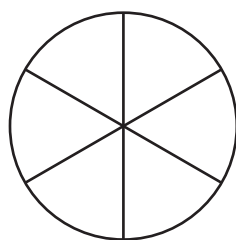
$$\frac{2}{6}$$



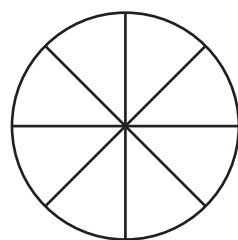
$$\frac{3}{4}$$



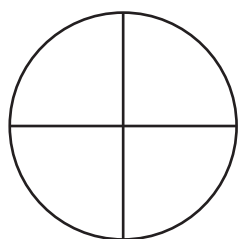
$$\frac{1}{8}$$



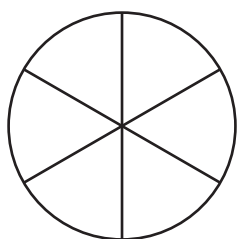
$$\frac{5}{6}$$



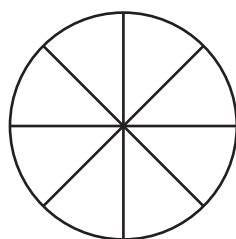
$$\frac{8}{8}$$



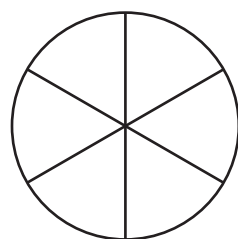
$$\frac{2}{4}$$



$$\frac{4}{6}$$



$$\frac{6}{8}$$



$$\frac{3}{6}$$