

Matematička zagonетка

1. razred







Svaki prikazani simbol označava jedan broj (1-9).



Pokušaj riješiti računicu.

	+	5	=	7
---	---	---	---	---




	=
---	---


	+		=	
---	---	---	---	---



	=
---	---


	+		=	7
---	---	---	---	---

	=
---	---

	-		=	
---	---	---	---	---

	=
---	---

	+		=	
---	---	---	---	---

	=
---	---