



Matematička zagonетка

1. razred



Svaki prikazani simbol označava jedan broj (1-9).



Pokušaj riješiti računicu.


	+		=	6
---	---	---	---	---

	=	
---	---	--

	-	1	=	
---	---	---	---	---

	=	
---	---	--

	+		=	7
---	---	---	---	---

	=	
---	---	--

	+		=	
---	---	---	---	---

	=	
---	---	--

	-	?	=	?
---	---	---	---	---

?	=	
---	---	--