


Matematička zagonетка

1. razred







Svaki prikazani simbol označava jedan broj (1-10).

Pokušaj riješiti računicu.

2	+		=	6
---	---	---	---	---




	=
---	---


	-		=	
---	---	---	---	---




	=
---	---


	-		=	7
---	---	---	---	---

	=
---	---

	+		=	
---	---	---	---	---

	=
---	---

	+		=	
---	---	---	---	---

	=
---	---