

# Matematička zagonетка

1. razred






Svaki prikazani simbol označava jedan broj (1-10).

Pokušaj riješiti računicu.


8	-		=	
---	---	---	---	---



	=	
---	---	--

	+		=	9
---	---	---	---	---




	=	
---	---	--

	-		=	
---	---	---	---	---

	=	
---	---	--

8	-		=	
---	---	---	---	---

	=	
---	---	--

	-		=	
---	---	---	---	---

	=	
---	---	--