


Matematička zagadanka

2. razred




**Svaki prikazani simbol označava jedan broj.
Pokušaj riješiti računicu.**


16	-		=	7
----	---	---	---	---



	=
---	---

	+		=	
---	---	---	---	---



	=
---	---

	:		=	
---	---	---	---	---

	=
---	---

6	•		=	
---	---	---	---	---

	=
---	---

	+		=	?
---	---	---	---	---

?	=
---	---