



# Matematička zagadanka

2. razred




Svaki prikazani simbol označava jedan broj.  
Pokušaj riješiti računicu.

24	-		=	
----	---	---	---	---




	=	
---	---	--


	+	8	=	
---	---	---	---	---




	=	
---	---	--


	:	5	=	
---	---	---	---	---

	=	
---	---	--

	:		=	
---	---	---	---	---

	=	
---	---	--

	•		=	
---	---	---	---	---

	=	
---	---	--