

Matematička zagonетка



2. razred




Svaki prikazani simbol označava jedan broj.
Pokušaj riješiti računicu.

12	-		=	6	:	2
----	---	---	---	---	---	---





	=
---	---


	+	11	=		+	
---	---	----	---	---	---	--





	=
---	---


	:	2	=	25	:	
---	---	---	---	----	---	--

	=
---	---

	•		=		+	
---	---	---	---	---	---	--

	=
---	---

	•		=		+	
---	---	---	---	---	---	--

	=
---	---