






Matematička zagonетка



3. razred





Svaki prikazani simbol označava jedan broj (1-9), a neki su brojevi već upisani.
Pokušaj riješiti računicu.


	+		=	
---	---	---	---	--


			1
+	1		


		9
---	---	---


			
-			


1		
---	---	---

	=
--	---

	=
---	---

	=
---	---

	=
---	---

	=
---	---

	=
---	---